

Turn in the following problems:

1. The point $P(0.5, 0)$ lies on the curve $y = \cos(\pi x)$.
 - (a) If Q is the point $(x, \cos(\pi x))$, use your calculator to find the slope of the secant line PQ (correct to six decimal places) for the following values of x :
 - i. 0
 - ii. 0.4
 - iii. 0.49
 - iv. 0.499
 - v. 1
 - vi. 0.6
 - vii. 0.51
 - viii. 0.501
 - (b) Using the results of part (a), guess the value of the slope of the tangent line to the curve at $P(0.5, 0)$.
 - (c) Using the slope from part (b), find an equation of the tangent line to the curve at $P(0.5, 0)$.
 - (d) Sketch the curve, two of the secant lines, and the tangent line.
2. Consider the following mathematical statements. Determine if the statements are always true, sometimes true, or never true.
 - If the statement is always true, then give a brief explanation of why it is true.
 - If the statement is sometimes true, then give two specific examples: one where the statement is true and one where the statement is not true. Be sure to indicate which example is which.
 - If the statement is never true, then give a specific counterexample (an example where the statement is not true).

An example must include either a graph or a specific function.

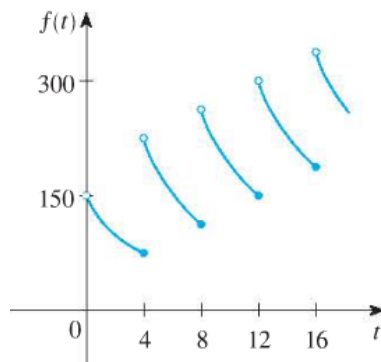
- (a) If $\lim_{x \rightarrow a} g(x) = 0$, then $\lim_{x \rightarrow a} \frac{f(x)}{g(x)}$ does not exist.
- (b) If $\lim_{x \rightarrow a^+} g(x) = 2$ and $\lim_{x \rightarrow a^-} g(x) = -2$, then $\lim_{x \rightarrow a} (g(x))^2$ exists.
- (c) If $\lim_{x \rightarrow a} f(x)$ exists and $\lim_{x \rightarrow a} (f(x) + g(x))$ exists, then $\lim_{x \rightarrow a} g(x)$ exists.
- (d) $\lim_{x \rightarrow 1} \frac{|x-1|}{x-1} = 1$
- (e) If f is a function, then $\lim_{x \rightarrow a} f(x) = f(a)$

In mathematics, we consider a statement to be false if we can find any examples where the statement is not true. We refer to these examples as counterexamples. Note that a counterexample is an example for which the “if” part of the statement is true, but the “then” part of the statement is false.

3. A patient receives a 150-mg injection of a drug every 4 hours. The graph shows the amount $f(t)$ of the drug in the bloodstream after t hours. Find

$$\lim_{t \rightarrow 12^-} f(t) \text{ and } \lim_{t \rightarrow 12^+} f(t)$$

and explain the significance of these one-sided limits.



4. Sketch the graph of an example of a function f that satisfies all of the given conditions.

- $\lim_{x \rightarrow 1} f(x) = 2$
- $\lim_{x \rightarrow 3^-} f(x) = -4$
- $\lim_{x \rightarrow 3^+} f(x) = 4$
- $f(1) = 0$
- $f(3) = 4$

5. Sketch the graph of the function and use it to determine the value of a for which $\lim_{x \rightarrow a} f(x)$ does not exist.

$$f(x) = \begin{cases} 1 + \sin(x) & \text{if } x < 0 \\ \cos(x) & \text{if } 0 \leq x \leq \pi \\ \sin(x) & \text{if } x > \pi \end{cases}$$

6. (a) What is wrong with the following equation?

$$\frac{x^4 - 8x^2 + 16}{x^2 - 4} = x^2 - 4$$

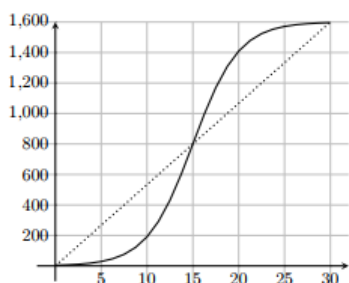
- (b) In view of part (a), explain why the equation

$$\lim_{x \rightarrow 2} \frac{x^4 - 8x^2 + 16}{x^2 - 4} = \lim_{x \rightarrow 2} (x^2 - 4)$$

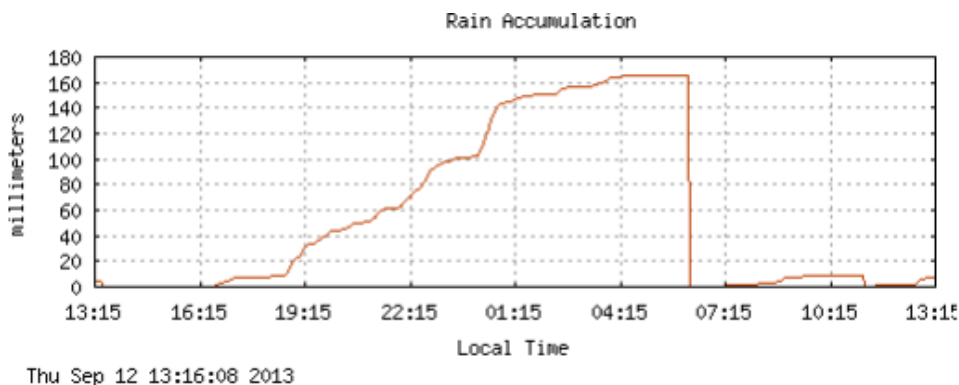
is correct.

These problems will not be collected, but you might need the solutions during the semester:

- The solid curve in the graph below gives position s of a car along a straight roadway (measured in meters), as a function of time t (measured in seconds).



- Find the slope of the dotted line in the graph above. Explain (including units), what this slope represents.
 - Estimate the instantaneous velocity at $t = 15$. Include units. Draw and label the line you used to estimate this.
- Below is a plot of the rainfall accumulation from the 2013 Boulder flood taken from the Foothills Lab Weather Station. The rainfall is measured in millimeters.



- Use the graph to estimate the average rainfall rate between 4:15 pm (marked as 16:15 on the graph) and 4:15 am the next morning (marked as 04:15 on the graph). Show all work and include units. Draw the line that you are finding the slope of.
- When is it raining hardest? Explain how you know.
- Estimate the rainfall rate at 22:15 (include units). Draw the line that you are finding the slope of.
- What does the graph indicate is happening to the rainfall during the hour after 4:15 am?
- Explain the precipitous drop between 04:15 and 07:15.

Optional Challenge Problem

Complete 5g from Project 1